



Cambridge O Level

CANDIDATE
NAME


--

CENTRE
NUMBER

--	--	--	--	--

CANDIDATE
NUMBER

--	--	--	--



FASHION & TEXTILES

6130/01

Paper 1 Theory

October/November 2020

2 hours

You must answer on the question paper.

You will need: Ruler
Small piece of fabric, needle and thread

INSTRUCTIONS

- Answer **four** questions in total:
 - Section A: answer **all** parts of Question 1.
 - Section B: answer **three** questions.
- Use a black or dark blue pen.
- Write your name, centre number and candidate number in the boxes at the top of the page.
- Write your answer to each question in the space provided.
- Do **not** use an erasable pen or correction fluid.
- Do **not** write on any bar codes.
- You may use an HB pencil for any diagrams or rough working.
- You should illustrate your answers with clear, bold diagrams wherever necessary.
- You may use a needle and thread and a small piece of fabric to help in making drawings of stitches.
- This fabric should **not** be handed in with your work.

INFORMATION

- The total mark for this paper is 100.
- The number of marks for each question or part question is shown in brackets [].

This document has **24** pages. Blank pages are indicated.

Section A

Answer **all** questions in this section.

Fig. 1.1 is a drawing of the front and back views of a shift dress.

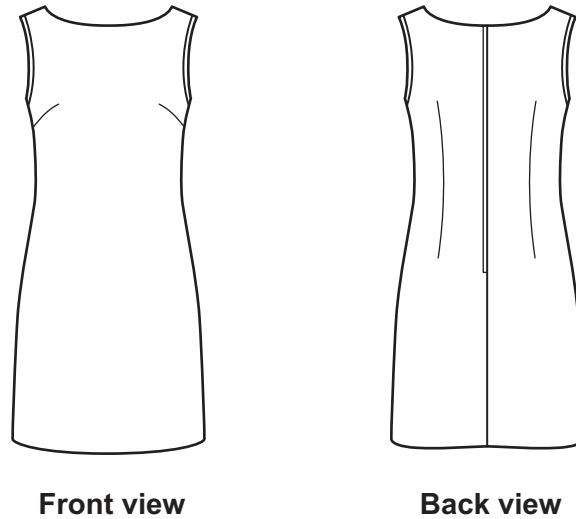


Fig. 1.1

1 (a) (i) Identify **one** fabric suitable for the shift dress in Fig. 1.1.

..... [1]

(ii) Give **two** reasons for choosing the fabric identified in 1(a)(i).

Reason 1

.....

Reason 2

.....

[2]

(iii) Explain, using labelled diagrams, how plain weave fabric is constructed.

[4]

(iv) Identify **one** vegetable fibre that could be used to make the fabric for the shift dress in Fig. 1.1.

..... [1]

(v) Identify **two** performance characteristics of the fibre named in **1(a)(iv)** that would make it suitable for the shift dress in Fig. 1.1.

1

2

[2]

(b) (i) Identify the method used to reduce fullness in the shift dress in Fig. 1.1.

..... [1]

(ii) Identify **three** methods that could be used to neaten the plain seams in the shift dress in Fig. 1.1.

1

2

3

[3]

(c) (i) Explain **two** factors that would influence the choice of zip for the shift dress in Fig. 1.1.

.....

.....

.....

.....

.....

.....

.....

..... [4]

(ii) State the correct order of work to insert the neckline zip in the back of the shift dress in Fig. 1.1.

.....

.....

.....

.....

.....

.....

.....

.....

.....

.....

.....

.....

..... [6]

Fig. 1.2 is a photograph of a flower.



Fig. 1.2

- (d) (i) Sketch and label a design based on the flower in Fig. 1.2 for a hand embroidered decoration for a dress. Your design should be labelled to indicate **two** embroidery stitches, the colours for the embroidery and the colour of the background fabric.

[4]

(ii) Explain how to use Computer Aided Design (CAD) to develop a machine embroidery design based on the image of the flower in Fig. 1.2.

.....
.....
.....
.....
.....
.....
.....
..... [4]

(e) Explain the meaning of the term **eco labelling**. Give examples to support your answer.

.....
.....
.....
.....
.....
.....
.....
..... [4]

(f) (i) Explain the meaning of the term **sustainable textiles**.

.....
.....
.....
..... [2]

(ii) Give **two** examples of sustainable textile fibres.

Example 1

Example 2 [2]

[Total: 40]

Section B

Answer **three** questions from this section.

2 (a) (i) Identify the origin of silk fibre.

..... [1]

(ii) Explain how silk fibres are produced.

.....
.....
.....
.....
.....
.....
.....
.....
.....
.....
..... [4]

(b) Describe crepe fabric made from silk.

Feel/handle

Appearance

[2]

(c) (i) Identify the origin of viscose fibre.

..... [1]

(ii) Compare **three** performance characteristics of silk fibres and viscose fibres.

.....

.....

.....

.....

.....

.....

.....

.....

.....

.....

.....

.....

.....

.....

.....

.....

.....

.....

.....

.....

..... [6]

3 The armholes of the shift dress in Fig. 1.1 are finished with a crossway/bias strip or a commercial binding.

(a) Explain with the use of labelled diagrams how to:

(i) cut out a crossway/bias strip

[4]

(ii) join crossway/bias strips together

[4]

4 (a) (i) Explain, using labelled diagrams, how to do silk painting on fabric for a scarf.

[6]

(ii) Suggest **two** different methods, other than silk painting, of applying colour to fabric for a scarf.

.....

..... [2]

(b) Compare **two** different types of hem that could be used to finish the edges of a silk scarf.

.....

.....

.....

.....

.....

.....

.....

.....

.....

.....

.....

.....

.....

.....

.....

.....

.....

.....

.....

.....

.....

.....

.....

..... [6]

(c) Evaluate the importance of selecting the correct type of interfacing when making a garment. Give examples to support your answer.

.....

.....

.....

.....

.....

.....

.....

.....

.....

.....

.....

.....

.....

.....

.....

.....

.....

.....

.....

.....

.....

.....

..... [6]

[Total: 20]

5 (a) Explain the term **bonded web** fabric.

.....

.....

.....

.....

.....

.....

..... [3]

Fig. 5.1 is a drawing of cropped trousers.

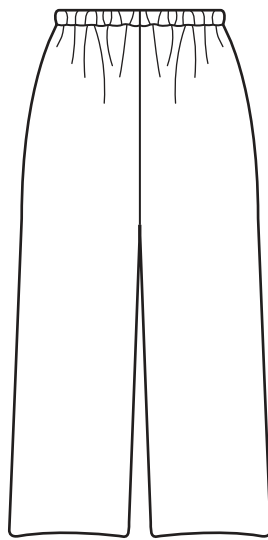


Fig. 5.1

(b) (i) Identify the waistline finish on the cropped trousers in Fig. 5.1.

..... [1]

(ii) State the correct order of work to make the waistline finish of the cropped trousers in Fig. 5.1.

.....

.....

.....

.....

.....

.....

.....

.....

.....

..... [4]

(c) Evaluate the suitability of **two** different types of pockets to use on the cropped trousers in Fig. 5.1.

.....

.....

.....

.....

.....

.....

.....

.....

.....

.....

.....

.....

.....

.....

.....

.....

..... [6]

(d) Discuss the advantages of using blended polyester cotton fibres to make the fabric for the cropped trousers in Fig. 5.1.

.....

.....

.....

.....

.....

.....

.....

.....

.....

.....

.....

.....

.....

.....

.....

.....

..... [6]

[Total: 20]

6 (a) (i) Sketch and label an original design for a fashionable sun hat for a teenager. Include a decoration, trimmings and an interesting style detail in your design.

[5]

(ii) Identify **one** fabric suitable for the sun hat sketched in **6(a)(i)**.

[1]

(iii) Give **two** reasons for your choice of fabric for the sun hat sketched in **6(a)(i)**.

Reason 1

.....

Reason 2

.....

[2]

(b) Discuss the advantages and disadvantages of one-off production when making a hat for a special occasion.

.....

.....

.....

.....

.....

.....

.....

.....

.....

.....

.....

.....

.....

.....

.....

.....

.....

..... [6]

BLANK PAGE

Permission to reproduce items where third-party owned material protected by copyright is included has been sought and cleared where possible. Every reasonable effort has been made by the publisher (UCLES) to trace copyright holders, but if any items requiring clearance have unwittingly been included, the publisher will be pleased to make amends at the earliest possible opportunity.

To avoid the issue of disclosure of answer-related information to candidates, all copyright acknowledgements are reproduced online in the Cambridge Assessment International Education Copyright Acknowledgements Booklet. This is produced for each series of examinations and is freely available to download at www.cambridgeinternational.org after the live examination series.

Cambridge Assessment International Education is part of the Cambridge Assessment Group. Cambridge Assessment is the brand name of the University of Cambridge Local Examinations Syndicate (UCLES), which itself is a department of the University of Cambridge.